



# Common Core Mathematics Practice for Kindergarten


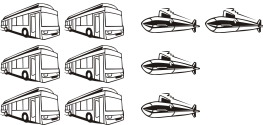
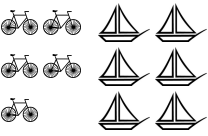







Name: \_\_\_\_\_

CCSS.Math.Content.K.CC.C.6 - Worksheet #19474

Standard: **CCSS.Math.Content.K.CC.C.6**

Description: Identify whether the number of objects in one group is greater than, less than, or equal to the number of objects in another group, e.g., by using matching and counting strategies.

## Circle the set that has less objects:

<p><b>1.</b></p> 	<p><b>6.</b></p> 
<p><b>2.</b></p> 	<p><b>7.</b></p> 
<p><b>3.</b></p> 	<p><b>8.</b></p> 
<p><b>4.</b></p> 	<p><b>9.</b></p> 
<p><b>5.</b></p> 	<p><b>10.</b></p> 

Printable #: 19474-CCSS.Math.Content.K.CC.C.6. Images © Graphics Factory.com

Copyright 2013-2015 by Internet4Classrooms Corporation. All Rights Reserved. For more Common Core Resources: [https://www.internet4classrooms.com/common\\_core](https://www.internet4classrooms.com/common_core)

1. This may be printed and reproduced by teachers, parents and students for classroom or homework usage.

2. It is acceptable to link to this page on other websites and in emails using the title above and the following URL:

[https://www.internet4classrooms.com/printables/common\\_core/math\\_mathematics\\_kindergarten/19474-CCSS.Math.Content.K.CC.C.6.htm](https://www.internet4classrooms.com/printables/common_core/math_mathematics_kindergarten/19474-CCSS.Math.Content.K.CC.C.6.htm) or simply: <http://i4c.xyz/yfcwqgu>.

3. This image and data thereon may not be sold, published online or in print by anyone else.

Teachers may request access to an answer key for all Internet4Classrooms printable practice sheets by going here: <http://i4c.xyz/n89msyv>.