



Common Core Mathematics Practice for Kindergarten

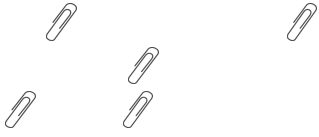
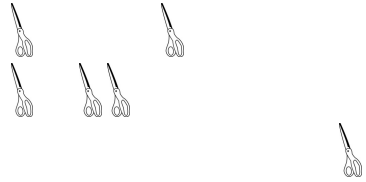






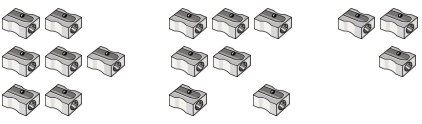

Name: _____

CCSS.Math.Content.K.CC.B.5 - Worksheet #16096

Standard: **CCSS.Math.Content.K.CC.B.5**

Description: Count to answer "how many?" questions about as many as 20 things arranged in a line, a rectangular array, or a circle, or as many as 10 things in a scattered configuration; given a number from 1-20, count out that many objects.

Word Problems: How Many in the Random Pattern (Up to 20)?:

<p>1. Count the paper clips aloud. Write the correct number:</p> 	<p>6. Count the sissors aloud. Write the correct number:</p> 
<p>2. Count the hole punches aloud. Write the correct number:</p> 	<p>7. Count the compasses aloud. Write the correct number:</p> 
<p>3. Count the paper clips aloud. Write the correct number:</p> 	<p>8. Count the hole punches aloud. Write the correct number:</p> 
<p>4. Count the sissors aloud. Write the correct number:</p> 	<p>9. Count the sissors aloud. Write the correct number:</p> 
<p>5. Count the sharpeners aloud. Write the correct number:</p> 	<p>10. Count the hole punches aloud. Write the correct number:</p> 

3. This image and data thereon may not be sold, published online or in print by anyone else.

Teachers may request access to an answer key for all Internet4Classrooms printable practice sheets by going here: <http://i4c.xyz/n89msyv>.
