



# Common Core Mathematics Practice for Kindergarten

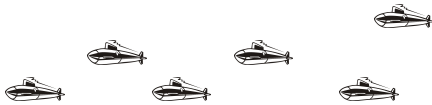
Name: \_\_\_\_\_  
CCSS.Math.Content.K.CC.B.5 - Worksheet #16071

Standard: **CCSS.Math.Content.K.CC.B.5**

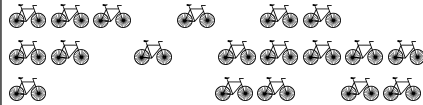
Description: Count to answer "how many?" questions about as many as 20 things arranged in a line, a rectangular array, or a circle, or as many as 10 things in a scattered configuration; given a number from 1-20, count out that many objects.

## Word Problems: How Many in the Random Pattern (Up to 20)?:

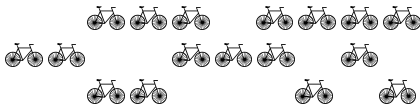
1. Count the submarines aloud. Write the correct number:



6. Count the bicycles aloud. Write the correct number:



2. Count the bicycles aloud. Write the correct number:



7. Count the airplanes aloud. Write the correct number:




3. Count the motorboats aloud. Write the correct number:




8. Count the cars aloud. Write the correct number:



4. Count the pickup trucks aloud. Write the correct number:



9. Count the airplanes aloud. Write the correct number:



5. Count the cars aloud. Write the correct number:



10. Count the cars aloud. Write the correct number:

