



Common Core Mathematics Practice for Kindergarten

Name: _____
CCSS.Math.Content.K.CC.B.5 - Worksheet #16015

Standard: **CCSS.Math.Content.K.CC.B.5**


Description: Count to answer "how many?" questions about as many as 20 things arranged in a line, a rectangular array, or a circle, or as many as 10 things in a scattered configuration; given a number from 1-20, count out that many objects.

Word Problems: How Many in the Random Pattern (Up to 20)?:

1. Count the ink wells aloud. Write the correct number:



6. Count the binder clips aloud. Write the correct number:



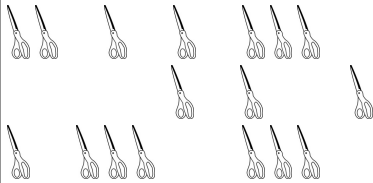
2. Count the sharpeners aloud. Write the correct number:



7. Count the ink wells aloud. Write the correct number:



3. Count the sissors aloud. Write the correct number:



8. Count the compasses aloud. Write the correct number:



4. Count the hole punches aloud. Write the correct number:




9. Count the ink wells aloud. Write the correct number:



5. Count the tape dispensers aloud. Write the correct number:



10. Count the sissors aloud. Write the correct number:



Printable #: 16015-CCSS.Math.Content.K.CC.B.5. Images © Graphics Factory.com

Copyright 2013-2015 by Internet4Classrooms Corporation. All Rights Reserved. For more Common Core Resources: https://www.internet4classrooms.com/common_core

1. This may be printed and reproduced by teachers, parents and students for classroom or homework usage.

2. It is acceptable to link to this page on other websites and in emails using the title above and the following URL:

https://www.internet4classrooms.com/printables/common_core/math_mathematics_kindergarten/16015-CCSS.Math.Content.K.CC.B.5.htm or simply: <http://i4c.xyz/y92d4sh6>.

3. This image and data thereon may not be sold, published online or in print by anyone else.

Teachers may request access to an answer key for all Internet4Classrooms printable practice sheets by going here: <http://i4c.xyz/n89msyv>.