













Common Core Mathematics Practice for Kindergarten

Name: _____
CCSS.Math.Content.K.CC.B.5 - Worksheet #15155

Standard: **CCSS.Math.Content.K.CC.B.5**

Description: Count to answer "how many?" questions about as many as 20 things arranged in a line, a rectangular array, or a circle, or as many as 10 things in a scattered configuration; given a number from 1-20, count out that many objects.

Word Problems: How Many in the Array (Up to 20)?:

<p>1. Count the pigs aloud. Write the correct number:</p> 	<p>6. Count the birds aloud. Write the correct number:</p> 
<p>2. Count the butterflies aloud. Write the correct number:</p> 	<p>7. Count the lions aloud. Write the correct number:</p> 
<p>3. Count the seals aloud. Write the correct number:</p> 	<p>8. Count the octopi aloud. Write the correct number:</p> 
<p>4. Count the lions aloud. Write the correct number:</p> 	<p>9. Count the chickens aloud. Write the correct number:</p> 
<p>5. Count the cats aloud. Write the correct number:</p> 	<p>10. Count the cats aloud. Write the correct number:</p> 

3. This image and data thereon may not be sold, published online or in print by anyone else.

Teachers may request access to an answer key for all Internet4Classrooms printable practice sheets by going here: <http://i4c.xyz/n89msyv>.
