













Common Core Mathematics Practice for Kindergarten

Name: _____
CCSS.Math.Content.K.CC.B.5 - Worksheet #15151

Standard: **CCSS.Math.Content.K.CC.B.5**

Description: Count to answer "how many?" questions about as many as 20 things arranged in a line, a rectangular array, or a circle, or as many as 10 things in a scattered configuration; given a number from 1-20, count out that many objects.

Word Problems: How Many in the Array (Up to 20)?:

<p>1. Count the fish aloud. Write the correct number:</p> 	<p>6. Count the lions aloud. Write the correct number:</p> 
<p>2. Count the butterflies aloud. Write the correct number:</p> 	<p>7. Count the octopi aloud. Write the correct number:</p> 
<p>3. Count the bats aloud. Write the correct number:</p> 	<p>8. Count the fish aloud. Write the correct number:</p> 
<p>4. Count the deer aloud. Write the correct number:</p> 	<p>9. Count the dogs aloud. Write the correct number:</p> 
<p>5. Count the seals aloud. Write the correct number:</p> 	<p>10. Count the ladybugs aloud. Write the correct number:</p> 

3. This image and data thereon may not be sold, published online or in print by anyone else.

Teachers may request access to an answer key for all Internet4Classrooms printable practice sheets by going here: <http://i4c.xyz/n89msyv>.
