





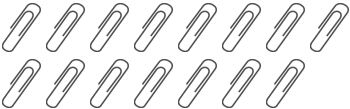
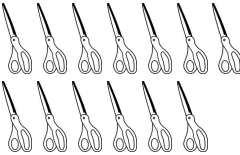




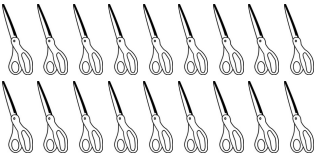
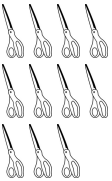
# Common Core Mathematics Practice for Kindergarten

Name: \_\_\_\_\_  
CCSS.Math.Content.K.CC.B.5 - Worksheet #15104

Standard: **CCSS.Math.Content.K.CC.B.5**

Description: Count to answer "how many?" questions about as many as 20 things arranged in a line, a rectangular array, or a circle, or as many as 10 things in a scattered configuration; given a number from 1-20, count out that many objects.

## Word Problems: How Many in the Array (Up to 20)?:

|  |  |
|--|--|
| <p><b>1. Count the sharpeners aloud. Write the correct number:</b></p>    | <p><b>6. Count the compasses aloud. Write the correct number:</b></p>          |
| <p><b>2. Count the paper clips aloud. Write the correct number:</b></p>  | <p><b>7. Count the sissors aloud. Write the correct number:</b></p>           |
| <p><b>3. Count the sharpeners aloud. Write the correct number:</b></p>  | <p><b>8. Count the sharpeners aloud. Write the correct number:</b></p>        |
| <p><b>4. Count the ink wells aloud. Write the correct number:</b></p>   | <p><b>9. Count the tape dispensers aloud. Write the correct number:</b></p>  |
| <p><b>5. Count the sissors aloud. Write the correct number:</b></p>     | <p><b>10. Count the sissors aloud. Write the correct number:</b></p>          |