




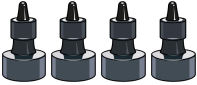




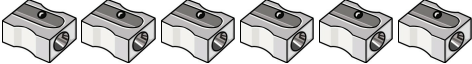


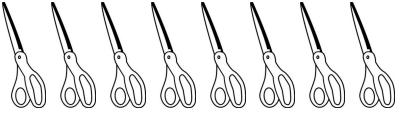
Common Core Mathematics Practice for Kindergarten

Name: _____
CCSS.Math.Content.K.CC.B.5 - Worksheet #14765

Standard: **CCSS.Math.Content.K.CC.B.5**

Description: Count to answer "how many?" questions about as many as 20 things arranged in a line, a rectangular array, or a circle, or as many as 10 things in a scattered configuration; given a number from 1-20, count out that many objects.

Word Problems: How Many in the Line (Up to 10)?:

<p>1. Count the tape dispensers aloud. Write the correct number:</p> 	<p>6. Count the ink wells aloud. Write the correct number:</p> 
<p>2. Count the binder clips aloud. Write the correct number:</p> 	<p>7. Count the tape dispensers aloud. Write the correct number:</p> 
<p>3. Count the paper clips aloud. Write the correct number:</p> 	<p>8. Count the pencils aloud. Write the correct number:</p> 
<p>4. Count the sharpeners aloud. Write the correct number:</p> 	<p>9. Count the binder clips aloud. Write the correct number:</p> 
<p>5. Count the paper clips aloud. Write the correct number:</p> 	<p>10. Count the sissors aloud. Write the correct number:</p> 

3. This image and data thereon may not be sold, published online or in print by anyone else.

Teachers may request access to an answer key for all Internet4Classrooms printable practice sheets by going here: <http://i4c.xyz/n89msyv>.
