












Common Core Mathematics Practice for Kindergarten

Name: _____
CCSS.Math.Content.K.CC.B.5 - Worksheet #14755

Standard: **CCSS.Math.Content.K.CC.B.5**

Description: Count to answer "how many?" questions about as many as 20 things arranged in a line, a rectangular array, or a circle, or as many as 10 things in a scattered configuration; given a number from 1-20, count out that many objects.

Word Problems: How Many in the Line (Up to 10)?:

<p>1. Count the pandas aloud. Write the correct number:</p> 	<p>6. Count the pigs aloud. Write the correct number:</p> 
<p>2. Count the butterflies aloud. Write the correct number:</p> 	<p>7. Count the rabbits aloud. Write the correct number:</p> 
<p>3. Count the octopi aloud. Write the correct number:</p> 	<p>8. Count the zebras aloud. Write the correct number:</p> 
<p>4. Count the pandas aloud. Write the correct number:</p> 	<p>9. Count the octopi aloud. Write the correct number:</p> 
<p>5. Count the cows aloud. Write the correct number:</p> 	<p>10. Count the spiders aloud. Write the correct number:</p> 