



Common Core Mathematics Practice for Kindergarten

Name: _____
CCSS.Math.Content.K.CC.B.5 - Worksheet #14744

Standard: **CCSS.Math.Content.K.CC.B.5**

Description: Count to answer "how many?" questions about as many as 20 things arranged in a line, a rectangular array, or a circle, or as many as 10 things in a scattered configuration; given a number from 1-20, count out that many objects.

Word Problems: How Many in the Line (Up to 10)?:

1.

Count the ink wells aloud. Write the correct number:



6.

Count the binder clips aloud. Write the correct number:



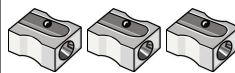
2.

Count the hole punches aloud. Write the correct number:



7.

Count the sharpeners aloud. Write the correct number:



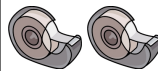
3.

Count the paper clips aloud. Write the correct number:



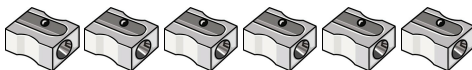
8.

Count the tape dispensers aloud. Write the correct number:



4.

Count the sharpeners aloud. Write the correct number:



9.

Count the sissors aloud. Write the correct number:



5.

Count the pens aloud. Write the correct number:



10.

Count the pencils aloud. Write the correct number:



