













# Common Core Mathematics Practice for Kindergarten

Name: \_\_\_\_\_  
CCSS.Math.Content.K.CC.B.5 - Worksheet #14718

Standard: **CCSS.Math.Content.K.CC.B.5**

Description: Count to answer "how many?" questions about as many as 20 things arranged in a line, a rectangular array, or a circle, or as many as 10 things in a scattered configuration; given a number from 1-20, count out that many objects.

## Word Problems: How Many in the Line (Up to 10)?:

<p><b>1.</b> Count the submarines aloud. Write the correct number:</p> 	<p><b>6.</b> Count the buses aloud. Write the correct number:</p> 
<p><b>2.</b> Count the cars aloud. Write the correct number:</p> 	<p><b>7.</b> Count the pickup trucks aloud. Write the correct number:</p> 
<p><b>3.</b> Count the airplanes aloud. Write the correct number:</p> 	<p><b>8.</b> Count the trucks aloud. Write the correct number:</p> 
<p><b>4.</b> Count the pickup trucks aloud. Write the correct number:</p> 	<p><b>9.</b> Count the pickup trucks aloud. Write the correct number:</p> 
<p><b>5.</b> Count the helicopters aloud. Write the correct number:</p> 	<p><b>10.</b> Count the cars aloud. Write the correct number:</p> 

Printable #: 14718-CCSS.Math.Content.K.CC.B.5. Images © Graphics Factory.com

Copyright 2013-2015 by Internet4Classrooms Corporation. All Rights Reserved. For more Common Core Resources: [https://www.internet4classrooms.com/common\\_core](https://www.internet4classrooms.com/common_core)

1. This may be printed and reproduced by teachers, parents and students for classroom or homework usage.

2. It is acceptable to link to this page on other websites and in emails using the title above and the following URL:

[https://www.internet4classrooms.com/printables/common\\_core/math\\_mathematics\\_kindergarten/14718-CCSS.Math.Content.K.CC.B.5.htm](https://www.internet4classrooms.com/printables/common_core/math_mathematics_kindergarten/14718-CCSS.Math.Content.K.CC.B.5.htm) or simply: <http://i4c.xyz/yqcm2bas>.

3. This image and data thereon may not be sold, published online or in print by anyone else.

Teachers may request access to an answer key for all Internet4Classrooms printable practice sheets by going here: <http://i4c.xyz/n89msyv>.