



CCSS Mathematics - Answer Keys for Kindergarten











CCSS.Math.Content.K.CC.C.6 - Answer Key for Worksheet #19493

Answer Key

Standard: CCSS.Math.Content.K.CC.C.6

Description: Identify whether the number of objects in one group is greater than, less than, or equal to the number of objects in another group, e.g., by using matching and counting strategies.

Circle the set that has less objects:

<p>1.</p>  <p>Answer: The cats should be circled.</p>	<p>6.</p>  <p>Answer: The ladybugs should be circled.</p>
<p>2.</p>  <p>Answer: The penguins should be circled.</p>	<p>7.</p>  <p>Answer: The octopi should be circled.</p>
<p>3.</p>  <p>Answer: The pigs should be circled.</p>	<p>8.</p>  <p>Answer: The rabbits should be circled.</p>
<p>4.</p>  <p>Answer: The dogs should be circled.</p>	<p>9.</p>  <p>Answer: The deer should be circled.</p>
<p>5.</p>  <p>Answer: The squirrels should be circled.</p>	<p>10.</p>  <p>Answer: The seals should be circled.</p>

3. This image and data thereon may not be sold, published online or in print by anyone else.
